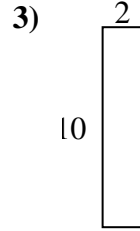
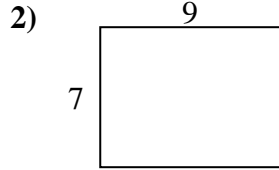
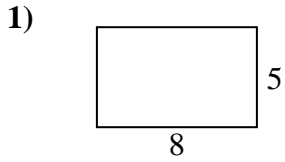


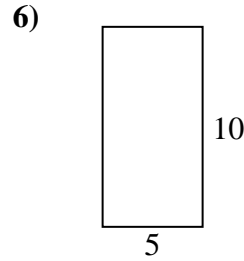
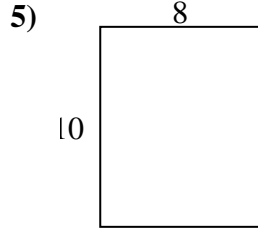
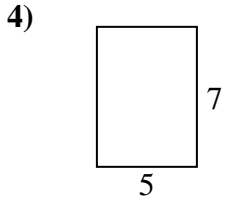


Find the perimeter and area of each figure. Each figure is in centimeters (cm). Not to scale.

Answers



1. \_\_\_\_\_



2. \_\_\_\_\_

3. \_\_\_\_\_

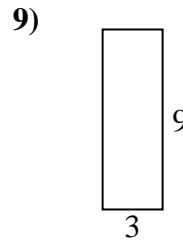
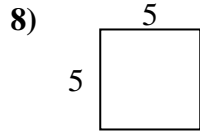
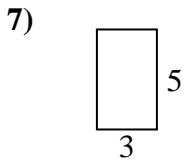
4. \_\_\_\_\_

5. \_\_\_\_\_

6. \_\_\_\_\_

7. \_\_\_\_\_

8. \_\_\_\_\_

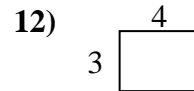
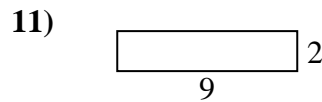
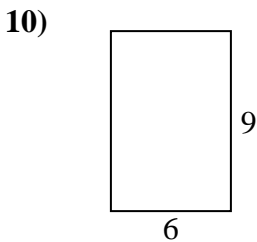


9. \_\_\_\_\_

10. \_\_\_\_\_

11. \_\_\_\_\_

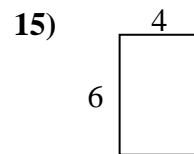
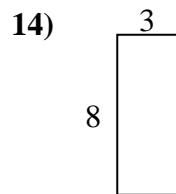
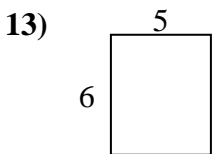
12. \_\_\_\_\_



13. \_\_\_\_\_

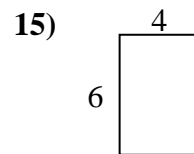
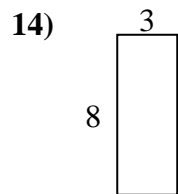
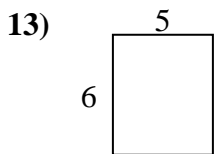
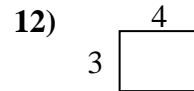
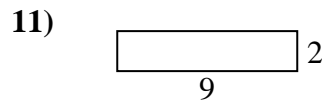
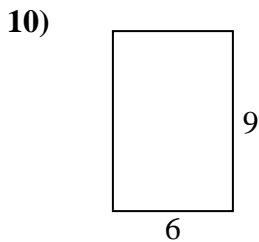
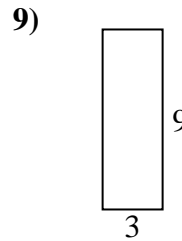
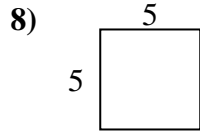
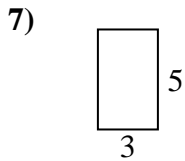
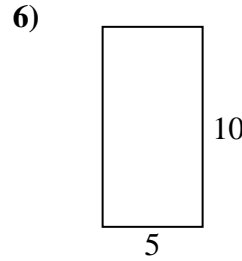
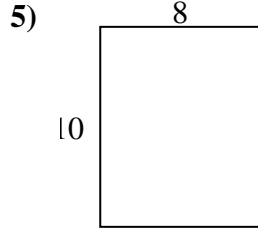
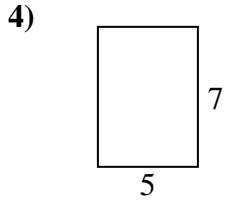
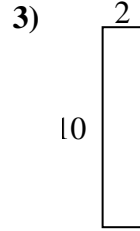
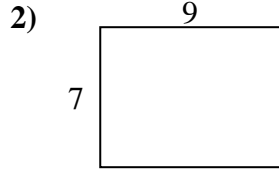
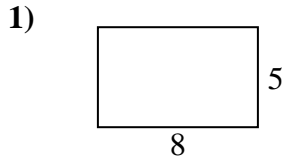
14. \_\_\_\_\_

15. \_\_\_\_\_





Find the perimeter and area of each figure. Each figure is in centimeters (cm). Not to scale.



Answers

1. 26 cm    40 cm<sup>2</sup>
2. 32 cm    63 cm<sup>2</sup>
3. 24 cm    20 cm<sup>2</sup>
4. 24 cm    35 cm<sup>2</sup>
5. 36 cm    80 cm<sup>2</sup>
6. 30 cm    50 cm<sup>2</sup>
7. 16 cm    15 cm<sup>2</sup>
8. 20 cm    25 cm<sup>2</sup>
9. 24 cm    27 cm<sup>2</sup>
10. 30 cm    54 cm<sup>2</sup>
11. 22 cm    18 cm<sup>2</sup>
12. 14 cm    12 cm<sup>2</sup>
13. 22 cm    30 cm<sup>2</sup>
14. 22 cm    24 cm<sup>2</sup>
15. 20 cm    24 cm<sup>2</sup>